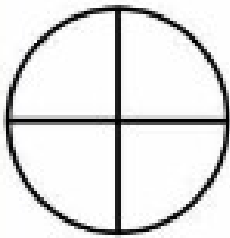
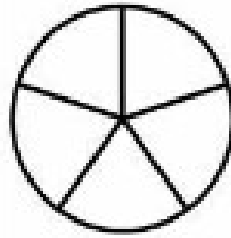


Zrób to ze mną Mamo

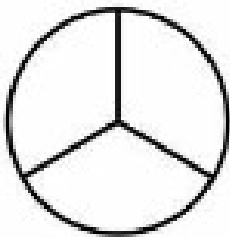
Zamaluj odpowiednią część figury




$$\frac{1}{4}$$



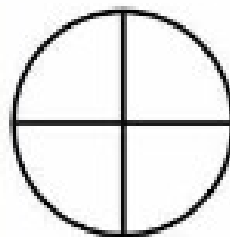
$$\frac{2}{5}$$



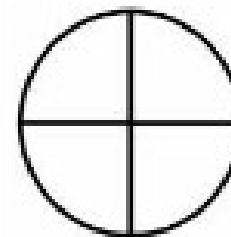
$$\frac{1}{3}$$



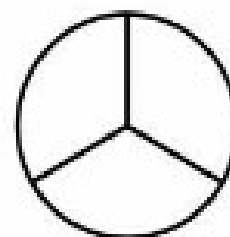
$$\frac{1}{5}$$



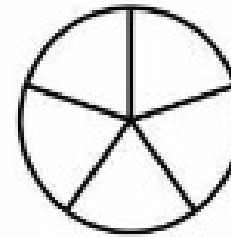
$$\frac{2}{4}$$



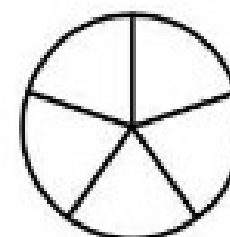
$$\frac{3}{4}$$



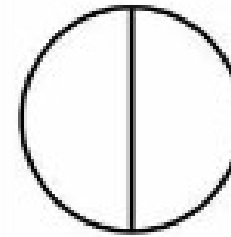
$$\frac{2}{3}$$



$$\frac{4}{5}$$



$$\frac{3}{5}$$



$$\frac{1}{2}$$